


Niveroù ha niveriñ

Niveroù eus 100 betek 499 (f1).



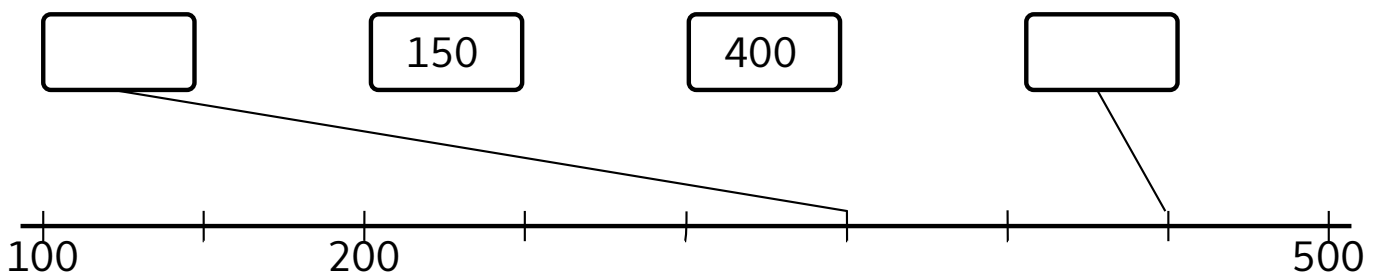
1 Kloka an daolenn.

Niver a-raok	Niver	Niver war-lerc'h
	101	
		310
145		
		479

2 Kloka an daolenn.

242	$200+40+2$		$100+3$
325			$30+300+1$
150			$4+70+200$
306			$200+7$
497			$60+5+400$

3 Kloka..



4 Kloka gant $<$, $>$ pe $=$.

125

245

348

378

$50+400+2$

452

$100+20$

120

146


400

300

$200+90+9$

Niveroù ha niveriñ

Niveroù eus 100 betek 499 (f2).



1 Kloka an daolenn.

Niver a-raok	Niver	Niver war-lerc'h
	400	
		301
209		
		111

2 Kloka an daolenn.

242	$200+40+2$		$20+100$
259			$300+9+50$
202			$10+1+100$
423			$200+30+4$
160			$7+80+400$

3 Kloka..




4 Kloka gant <, > pe = .

392	299	360	306	$300+20$	302
485	305	$100+50+3$	150	479	$400+70+9$

Niveroù ha niveriñ

Niveroù eus 100 betek 499 (f3).



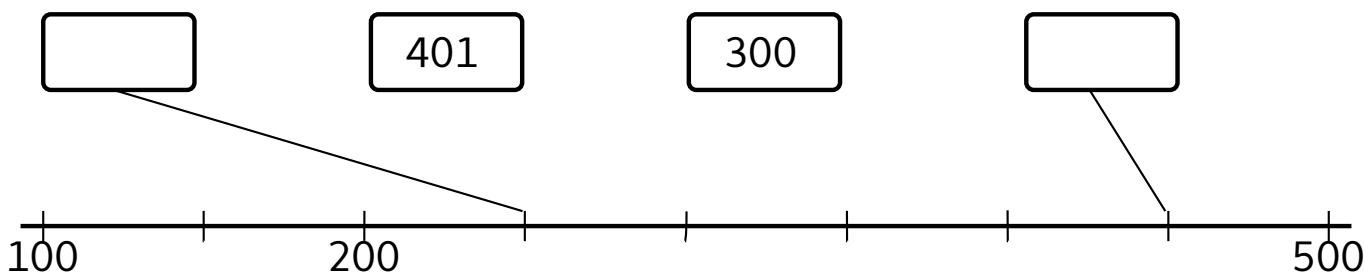
1 Kloka an daolenn.

Niver a-raok	Niver	Niver war-lerc'h
	201	
		287
198		
		456

2 Kloka an daolenn.

242	$200+40+2$		$400+80$
169			$200+6+70$
325			$5+50+200$
170			$300+2$
203			$90+300$

3 Kloka..



4 Kloka gant $<$, $>$ pe $=$.

128

125

409

299

$200+80+1$

282

$300+9$

309

$400+20$

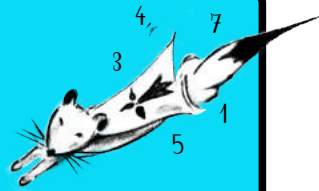
402

425

$300+20+5$

Niveroù ha niveriñ

Niveroù eus 100 betek 499 (f4).



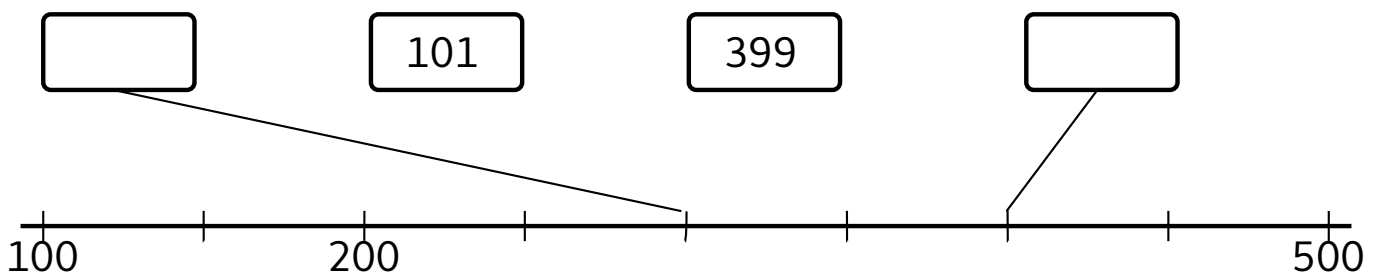
1 Kloka an daolenn.

Niver a-raok	Niver	Niver war-lerc'h
	423	
		149
200		
		301

2 Kloka an daolenn.

242	$200+40+2$		$200+20+2$
171			$400+9$
309			$7+100+60$
488			$90+9+100$
230			$300+50+2$

3 Kloka..



4 Kloka gant $<$, $>$ pe $=$.

128

125

409

299

$200+80+1$

282

$300+9$

309

$400+20$


402

425

$300+20+5$

Niveroù ha niveriñ

Niveroù eus 100 betek 499 (f4).



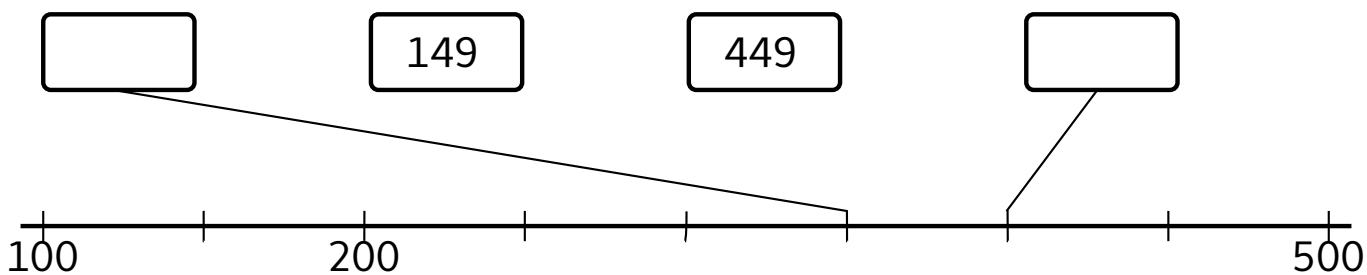
1 Kloka an daolenn.

Niver a-raok	Niver	Niver war-lerc'h
	399	
		262
236		
		400

2 Kloka an daolenn.

242	$200+40+2$		$400+30+9$
423			$90+7+100$
193			$40+3+200$
294			$8+80+400$
310			$20+300$

3 Kloka..



4 Kloka gant <, > pe = .

321	400	$400+50+1$	451	458	485
299	300	$40+9+100$	394	204	$100+90+9$